

SIR APOLLO KAGGWA SCHOOLS SINCE 1996

PLE PREP TEST III TERM 2 2022

PRIMARY SEVEN

MATHEMATICS

Time allowed: 2 hours 30 minutes

Index No.	EMIS NO.	Personal No.												
	<table border="1" style="width: 100%; border-collapse: collapse;"> <tr> <td style="width: 12.5%; height: 20px;"></td> <td style="width: 12.5%;"></td> <td style="width: 12.5%;"></td> <td style="width: 12.5%;"></td> <td style="width: 12.5%;"></td> <td style="width: 12.5%;"></td> </tr> </table>							<table border="1" style="width: 100%; border-collapse: collapse;"> <tr> <td style="width: 12.5%; height: 20px;"></td> <td style="width: 12.5%;"></td> <td style="width: 12.5%;"></td> <td style="width: 12.5%;"></td> <td style="width: 12.5%;"></td> <td style="width: 12.5%;"></td> </tr> </table>						

Candidate's Name: _____

Candidate's Signature: _____

District Name: _____

School Name: _____

Read the following instructions carefully:

1. The paper has **two** sections: **A** and **B**
2. Section **A** has 20 short questions (40 marks)
3. Section **B** has 12 questions (60 marks)
4. Answer **ALL** questions. All answers to both Sections **A** and **B** must be written in the spaces provided.
5. All answers must be written using a blue or black ball point pen or ink. Diagrams should be drawn in pencil.
6. Unnecessary alteration of work may lead to loss of marks.
7. Any handwriting that cannot be easily read may lead to loss of marks.
8. Do not fill anything in the boxes indicated for Examiner's use only.

FOR EXAMINER'S USE ONLY		
Qn. No	MARK	SIGN
1 – 10		
11 – 20		
21 – 30		
31 – 32		
TOTAL		

Turn over

SECTION A (40 MARKS)

1. **Work out:** $79 - 48$

2. **Write XLVII in Hindu Arabic Numerals.**

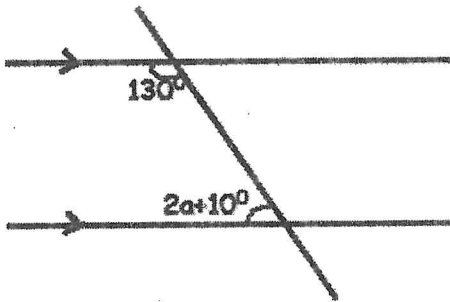
3. **Simplify:** $3y - 5y + 4y$

4. **Given that $P = \{ a, b, c, d, e, f \}$ and $Q = \{ a, e, i, o, u \}$, find $n(P \cup Q)$.**


5. **Work out:** $1\frac{1}{4} - \frac{2}{3}$

6. **Using a ruler, a pencil and a pair of compasses only, construct an angle of 45° in the space below.**

7. A shopkeeper packed salt in 750g packets. How many packets did the shopkeeper make from 21kg of salt?
8. A dice is thrown once. What is the probability that the score is a square number?
9. If today is Friday, what day of the week was it 30 days ago?
10. In the diagram below, find the value of a in degrees.



11. Find the next number in the sequence:
1, 8, 5, 12, 9, _____.
12. Show the time "Twenty minutes to four" on the clock face below.



13. What is the place value of 4 in the number 4,659,273?

14. Find the Lowest Common Multiple (L.C.M) of 9 and 12.

15. Express 0.18 as a fraction in its lowest terms.

16. Find the median of;

3 , 2 , 5 , 7 , 4 , 6 , 9 , 2

17. A car travels 144km in $2\frac{1}{4}$ hours. What is the average speed?

18. Given that $x = 5$, $a = 0$ and $b = 2$, Find the value of $x^b + x^a$.

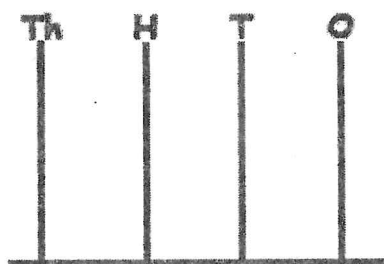
19. Wandera bought a shirt for sh. 35,800. He was given sh. 14,200 as change. How much money did he have at first?

20. Calculate the area of a square whose perimeter is 60m.

SECTION B : 60MARKS

21a) Show the number 3026 on the abacus below.

(1mark)



b) Find the difference between the values of digits 5 and 7 in the number 856,721.

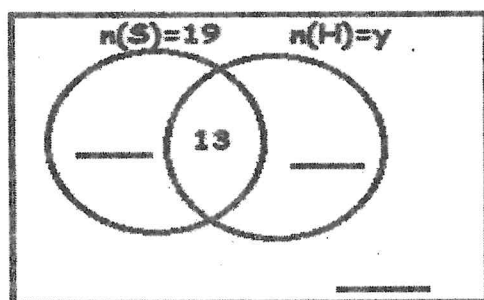
(3marks)

22. In a P.7 class of 34 candidates, 19 like swimming (S), y like hockey (H), 13 like both swimming and hockey while 7 do not like any of the two games.

a) Represent the above information in the Venn diagram below.

(3marks)

$$n(\Sigma) = 34$$

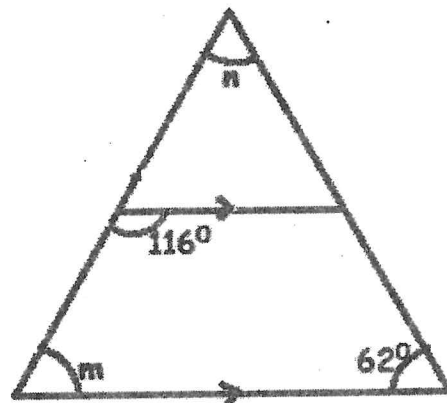


b) Find the value of y .

(2marks)

c) If a candidate is picked at random, what is the probability that the candidate likes hockey only? (1mark)

23. Study the figure below and use it to answer questions that follow.



Find the size of;

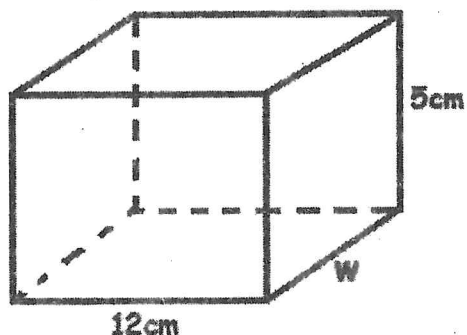
a) angle m

(2marks)

b) angle n

(2marks)

24. The volume of the cuboid below is 480cm^3 . Study and use it to answer questions that follow.



- a) How many edges does it have? (1mark)
- b) Find the value of w . (3marks)

- 25a) Expand 23.45 using values. (2marks)

- b) Work out: $\frac{24.6 - 14.1}{0.07}$ (3marks)

26. Mapesa bought the items shown in the table below from a shop.

ITEM	PRICE	AMOUNT
3kg of sugar	Sh. 3400 per kg	Sh. _____
_____ loaves of bread	Sh. 4800 per loaf	Sh. 9600
$\frac{1}{2}$ litre of cooking oil	Sh. _____ per litre	Sh. 4000
TOTAL	EXPENDITURE	Sh. _____

a) Complete the table above.

(4marks)

b) If Mapesa had sh. 25,000, what was his change?

(2marks)

27a) A motorist travels at a speed of 15m per second. Express this speed in km per hour.

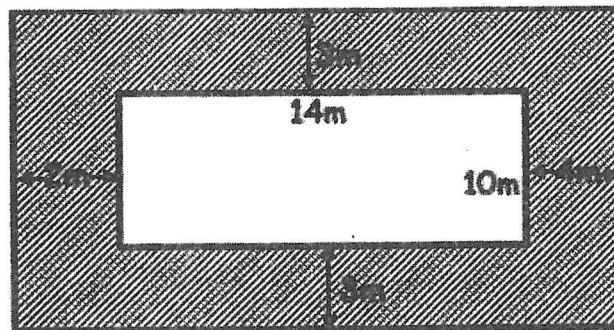
(3marks)

- b) Town A is 240km from town B. A car left town A for town B at 8:30a.m. and travelled at a steady speed of 90km per hour. At what time did the car reach town B? (3marks)

28. Adongo spends $\frac{1}{3}$ of her salary on clothing, $\frac{5}{12}$ on food and saves the rest. Draw an accurate pie chart of radius 3.5cm to represent the above information. (6marks)

29. Tap A takes 4 hours to fill a tank. Tap B takes 2 hours to fill the same tank. If the two taps are opened together at the same time, how long will they take to fill the tank? (4 marks)

30. Study the figure below and use it to answer the question that follows.



Find the area of the shaded part.

(5 marks)

- 31a) Using a ruler, a pencil and a pair of compasses only, construct a triangle PQR in which $QR = 7\text{cm}$, angle $PQR = 60^\circ$ and angle $QRP = 45^\circ$. Drop a perpendicular from P to meet QR at T . (5marks)

b) Measure PT _____ cm (1mark)

32. A cock costs twice as much as a hen. A turkey costs sh. 8,000 more than a cock. If the cost of three items is sh. 108,000. Calculate the cost of a cock. (4marks)

THE END

SIR APOLLO KAGGWA SCHOOLS SINCE 1996
PLE PREP TEST III TERM 2 2022

PRIMARY SEVEN
SOCIAL STUDIES AND RELIGIOUS EDUCATION

Time allowed: 2 hours 15 minutes

Index No.	EMIS NO.	Personal No.

Candidate's Name: _____

Candidate's Signature: _____

District Name: _____

School Name: _____

Read the following instructions carefully:

1. The paper has two sections: A and B
2. Section A has 40 questions (40 marks)
3. Section B has 15 questions (60 marks)
Answer **ALL** questions. All answers to both Sections A and B must be written in the spaces provided.
4. All answers must be written using a blue or black ball point pen or ink. Diagrams should be drawn in pencil.
5. Unnecessary crossing of work may lead to loss of marks.
6. Any handwriting that cannot be easily read may lead to loss of marks.
7. Do not fill anything in the boxes indicated;
For Examiner's use only.

FOR EXAMINER'S USE ONLY		
QTN NO.	MARK	SIGN
1 – 10		
11 – 20		
21 – 30		
31 – 40		
41 – 43		
44 – 46		
47 – 49		
50 – 52		
53 – 55		
TOTAL		

Turn over

SECTION A

1. Name one lake in the rift valley crossed by the latitude 0° .

2. Mention any one product got from Mabira forest.

3. Which method of mining is used to mine limestone in Tororo?

4. Give one problem faced by farmers when taking their goods to markets.

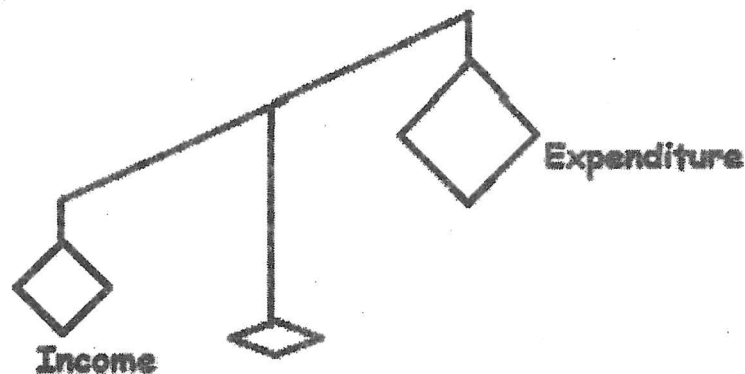
5. State any one social effect of the great trek.

6. Describe the climate of Libya.

7. How do common markets help to promote trade in East Africa?

8. Give the main cause of Maji Maji rebellion in Tanganyika.

Use the diagram below to answer numbers 9 and 10.



9. Which ministry is responsible for drafting the above drawing?

10. Give one reason why desert plants have more thorns than leaves?

11. What title is given to a person who heads the secretariat of East African Community (EAC)?

12. Give any one reason why the Nilotics changed from practicing pastoralism to mixed farming.

13. Why is our district divided into sub counties or divisions?

14. How does marriage promote culture in the society?

15. How do people living on mountain slopes care for them?

16. In which way does the movement of the earth around the sun affect climate?

17. Why were the Banyoro able to form a kingdom when they came to Uganda?

18. In which one way do people in our community make use of papyrus?

19. Which social service center is most suitable for providing medical care.

20. Kalangala has a population of 30,000 people with an area of 300km². Calculate the population density of Kalangala.

21. State any one advantage of sharing responsibilities among boys and girls at home.

22. Why are news papers not commonly used in rural areas?

23. Give any one advantage of using good fishing methods in East Africa.

24. State any one way of controlling floods.

25. How do forests help in rain formation?

26. What type of transport is mostly used by people from Entebbe to Buvuma district?

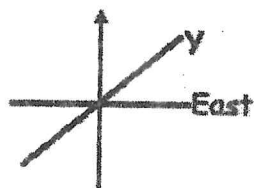
27. Write any one peaceful method used by the British to get Uganda as her protectorate.

28. Why does Victoria Nile flow from Lake Victoria towards Lake Kyoga?

29. Give one factor that contributes to the quality of life of people in a given area. .

30. Mention any one item of trade which was brought to East Africa by the Arabs.

Study the diagram below and answer questions about it.



31. Give the opposite direction of point marked Y.

32. What was the original homeland of highland Nilotes?

33. Give any one condition under which a by-election is conducted in Uganda.

34. Give any one reason why the people of Uganda demanded for independence from the British.

35. Which body in Uganda is responsible for game parks and reserves?

For questions 36 - 40, answer Either Christianity or Islam but not both in a number.

36. Either: Name any one example of a foreign religion in Uganda.

OR: Name any one example of a foreign religion in Uganda

37. **Either:** What was the work of Moses before God called him?

OR: What was the work of Prophet Musa before Allah called him?

38. **Either:** Give one reason why Christians read the Bible.

OR: Give one reason why Moslems read the Quran.

39. **Either:** State the importance of Jesus' resurrection to a Christian.

OR: State the importance of Miraj to Moslems.

40. **Either:** Why did Joseph and Mary take baby Jesus to Egypt?

OR: Why did Prophet Muhammad (PBUH) migrate from Mecca?

SECTION B

- 41a) Name the **two** elements of wind recorded at the weather station.
(i) _____
(ii) _____
- b) Mention any **one** danger caused by strong wind.

- c) Give any **one** way of controlling the dangers caused by strong wind.

- 42a) Name any **two** organs of East Africa Community (EAC)
(i) _____
(ii) _____
- b) Give any **one** way Democratic Republic of Congo (DRC) will benefit from being a member of EAC.

- c) State any **one** factor limiting trade among EAC.

43a) Give any two methods used to demand for independence by Africans.

(i) _____

(ii) _____

b) Give any two reasons why Africans were easily defeated in their resistance against colonialists.

(i) _____

(ii) _____

44a) Name the continent of origin for the first Christian Missionaries in Uganda.

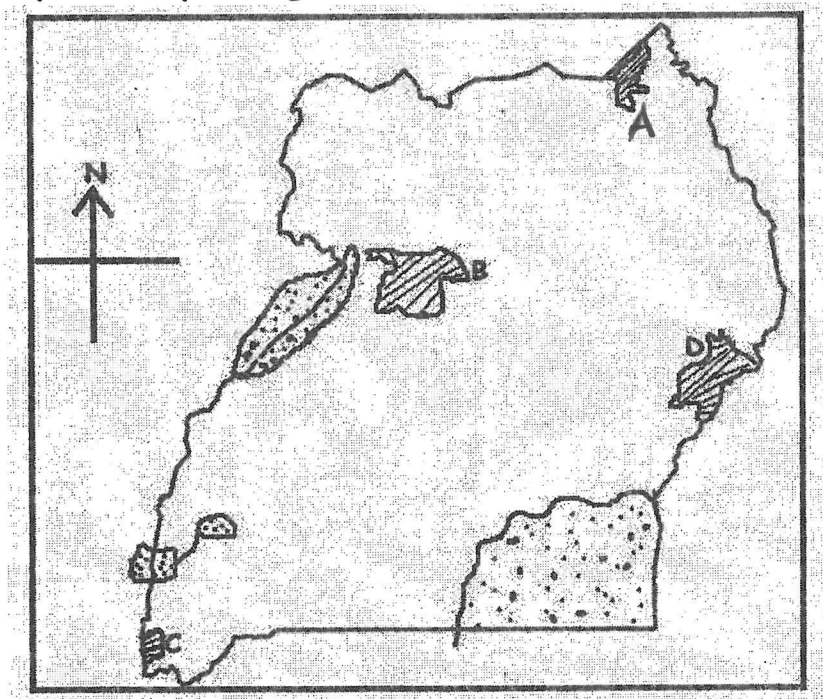
b) Write any two positive contributions of missionaries in Uganda.

(i) _____

(ii) _____

c) Mention any one of the early missionaries who came to Uganda in 1879.

45. Study the map of Uganda and answer questions about it.



a) Name the major tourist attractions marked

B _____

D _____

b) Give **one** reason why crocodiles are not common in game park marked **A**.

c) Which feature attracts most tourists in game park **C**?

46a) State any **one** role of the Legislative Council (LEGCo) in Uganda before independence.

b) Name any **two** Africans who joined Uganda's LEGCo in 1945.

(i) _____

(ii) _____

c) How did the first Ugandans become members of the LEGCo.

47a) Give any **one** way people save money apart from keeping in the bank.

b) Give any **three** reasons why people save money.

(i) _____

(ii) _____

(iii) _____

48a) How is Mt. Kilimanjaro similar to Cameroon Highlands in their way of formation?

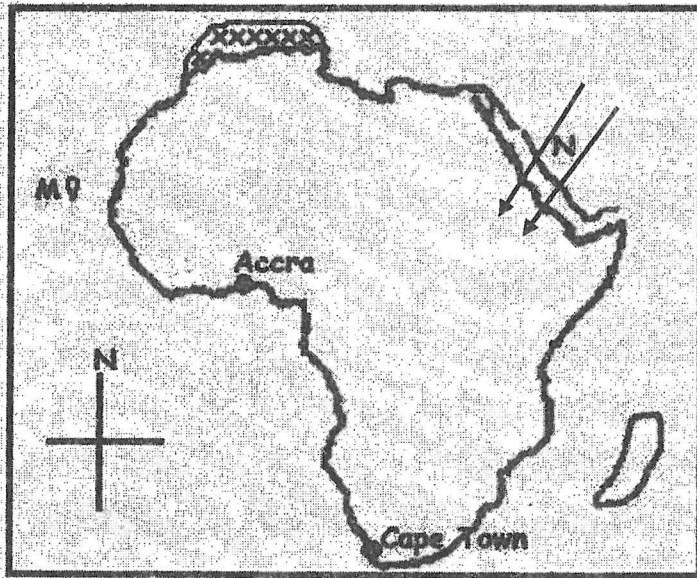
b) Give any **two** advantages of mountains to people.

(i) _____

(ii) _____

c) State any **one** problem caused by heavy rainfall in mountains.

49. Study the map of Africa and answer questions about it.



- a) Name the Island country marked M on the map.

- b) Use a pencil and draw the Prime Meridian on the map.

- c) State one effect of prevailing wind marked N on the climate of Africa.

- d) Name the climatic region shaded xxx on the map.

- 50a) Give any two reasons why the British built the Uganda
(i) _____
(ii) _____
- b) State any one problem builders of the Uganda Railway faced.

- c) Name the first railway line to be constructed in East Africa.

For questions 51-55, answer Either Christianity or Islam but not both in a number.

51. Either (a) Name the first two gospels in the Bible.
(i) _____
(ii) _____

b) Give two reasons why Christians read the Bible.

(i) _____

(ii) _____

OR(a) Name the first two surahs of the Quran.

(i) _____

(ii) _____

b) Give two reasons why Moslems read the Quran.

(i) _____

(ii) _____

52. Either(a) What do we call the three persons in one God?

b) Name the three persons that make up one God in Christianity.

(i) _____

(ii) _____

(iii) _____

OR(a) What term is used to mean the five obligatory prayers in Islam?

b) Name any three of the daily five prayers said by a Moslem.

(i) _____

(ii) _____

(iii) _____

53. Either (a) Which symbol of the Holy spirit appeared on Jesus' baptism?

b) Mention any two events that happened at the baptism of Jesus.

(i) _____

(ii) _____

c) State the importance of baptism to a Christian.

OR(a) What do we call the voluntary charity a Moslem gives to help the needy?

b) Mention the two forms (types) of zakat in Islam.

(i) _____

(ii) _____

c) State any one benefit of Zakah to a Moslem who gives it.

54a) Either(a) Name the prayer Jesus taught to His disciples.

b) Give two reasons why Christians pray.

(i) _____

(ii) _____

c) Give one reason why some Christians don't pray.

OR(a) Name the sunnah prayer said by Moslems at night during Ramadhan.

b) Give any two reasons why Moslems pray.

(i) _____

(ii) _____

c) Give one reason why some Moslems don't pray.

55. Either(a) Give any two ways a Christian child can show love for elderly people.

(i) _____

(ii) _____

b) Give two ways of a Christian benefits by serving others.

(i) _____

(ii) _____

OR(a) Give any two ways a Moslem child can show love for elderly people.

(i) _____

(ii) _____

b) Give two ways a Moslem benefit by serving others.

(i) _____

(ii) _____

THE END

SIR APOLLO KAGGWA SCHOOLS SINCE 1996

PLE PREP TEST III TERM 2 2022

PRIMARY SEVEN

INTEGRATED SCIENCE

Time allowed: 2 hours 15 minutes

Index No.	EMIS NO.	Personal No.

Candidate's Name: _____

Candidate's Signature: _____

District Name: _____

School Name: _____

Read the following instructions carefully:

1. The paper has two sections: A and B
2. Section A has 40 questions (40 marks)
3. Section B has 15 questions (60 marks)
4. Answer ALL questions. All answers to both Sections A and B must be written in the spaces provided.
5. All answers must be written using a blue or black ball point pen or ink. Diagrams should be drawn in pencil.
6. Unnecessary crossing of work may lead to loss of marks.
7. Any handwriting that cannot be easily read may lead to loss of marks.
8. Do not fill anything in the boxes indicated, For Examiner's use only.

FOR EXAMINER'S USE ONLY		
Qn. No	MARK	SIGN
1 – 10		
11 – 20		
21 – 30		
31 – 40		
41 – 43		
44 – 46		
47 – 49		
50 – 52		
53 – 55		
TOTAL		

Turn over

SECTION A: 40Marks


Questions 1 to 40 carry one mark each.

1. How is soap important in promoting personal hygiene?

2. What kind of food should be fed to the elderly vulnerable people?

3. Why is it not necessary to cover the squat hole of a V.I.P latrine?

The diagram below shows a simple machine. study it and answer questions 4 and 5.



4. Put an arrow on the string to show the direction of the effort.
5. How does the simple machine simplify work?

6. Our neighbours child has a pot belly and the face of an old man. He is also very thin. What deficiency disease is he suffering from?

7. State any one method of controlling root crop pests.


8. Why is it dangerous to break blisters on a burn?

9. Identify the primary sex organ in female animals.

10. Why is an electro magnet known as a temporary magnet?

11. How does refrigeration help in food preservation?

The diagram below shows a common invertebrate. Study and use it to answer question 12.



12. To which group of invertebrates does it belong?

13. How is the animal shown harmful to us?

14. Which characteristic of a fuse enables it to work properly?

15. Identify one method of harvesting cassava.

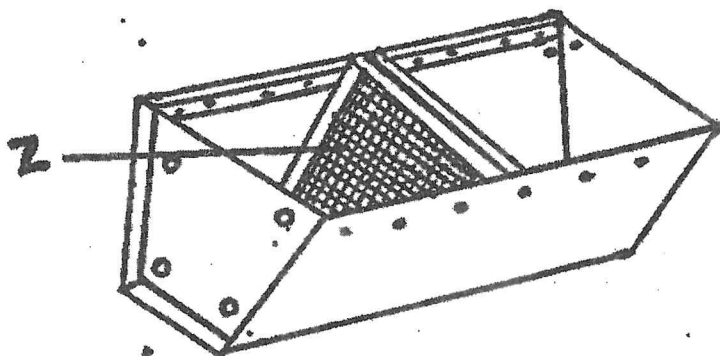
16. Why do insect pollinated flowers have brightly coloured petals?

17. Why should we remove the clothes of a child with a fever?

18. What is the difference between condensation and the rotting of dead matter?

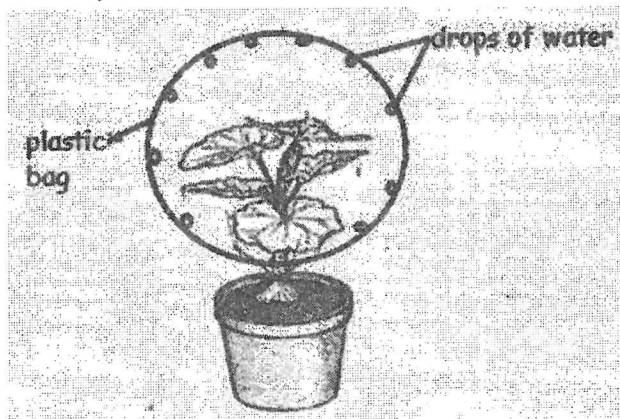
19. State one disadvantage of the free-range system of keeping poultry.

The diagram shows a structure used for keeping of bees. Study and use it to answer question 20.



20. Identify the type of modern bee hive shown above.
-
21. How is part labelled Z useful to the bee hive?
-
22. State one way in which air can be used to satisfy man's needs.
-
23. Nazziwa breathed out onto a mirror and she noticed that a mist-like substance was formed on the mirror. What does this activity prove?
-
24. Give one example of an involuntary muscle.
-
25. Why is glass known as a transparent object?
-
26. Why should babies be introduced to foods other than breast milk at the age of 4 months?
-
27. Give one animal food stuff rich in proteins.
-
28. How is thinning important in crop growing?
-

Study the diagram and answer the questions which follow. Study and use it to answer question 29 and 30.



29. Which plant process is shown in the diagram?

30. Give one way in which plants overcome the process shown.

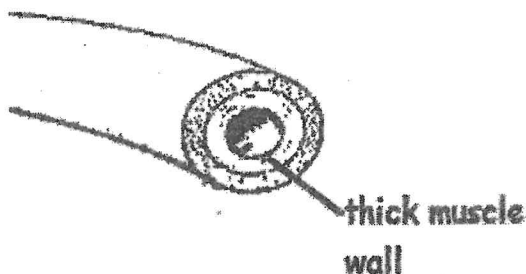
31. State the use of the suckers and hooks to a tape worm.

32. Why are telephone and electric wires left loose between their poles?

33. Name the force which pulls objects towards the center of the earth.

34. Name the organ which filters blood to remove wastes.

The diagram shows a blood vessel. Study it and answer questions 35 and 36.



35. Name the blood vessel shown in the diagram.

36. Why does the blood vessel shown have thick walls?

37. Which delicate body organ is protected by the backbone?

38. Why is the BCG vaccine administered at birth?

39. Why do solids have a definite shape and volume?

40. Mention one disease that spreads through air.

SECTION B: (60marks)

Questions 41 to 55 carry four marks each.

41a) What is swarming?

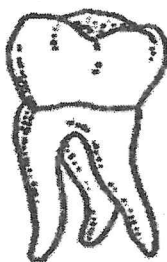
b) Give two reasons why bees swarm.

(i) _____

(ii) _____

c) How is a smoker useful in the harvesting of honey.

42. The diagram shows a tooth. Study and use it to answer questions that follow about it.



a) Name the tooth shown in the diagram.

b) What is the function of the tooth shown in the diagram?

c) How is the tooth shown adapted to its duty?

d) State one way of caring for your teeth.

43a) What is puberty?

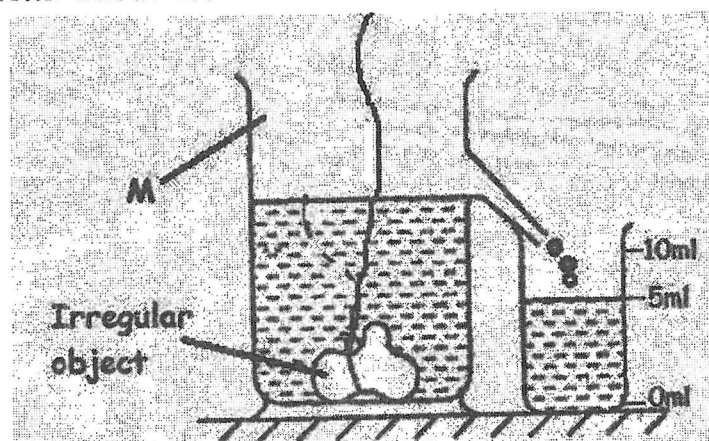
b) State two secondary sex changes which occur in both adolescent boys and girls.

(i)

(ii)

c) Mention one common problem that happens to the adolescents.

44. The experiment below shows displacement method. Study and use it to answer questions about it.



a) Name the container labelled M.

b) What is the volume of the irregular object?

c) If the mass of the irregular object is 25gm. Find its density. (2marks)

45a) State **two** functions of the skin.

(i) _____

(ii) _____

b) Identify **one** skin disease characterized by itching and formation of blisters on the skin.

c) State **one** way of caring for the skin.

46. Match the items in A with the correct ones in B.

A

Circuit

Fuse

Switch

Bulb

B

-converts electrical energy into heat and light.

-breaks and completes the circuit at the user's will.

-melts breaks the circuit when there is overflow of current

-the complete path of an electric current.

(a) Circuit _____

(b) Fuse _____

(c) Switch _____

(d) Bulb _____

47a) Why do we need oxygen in our bodies?

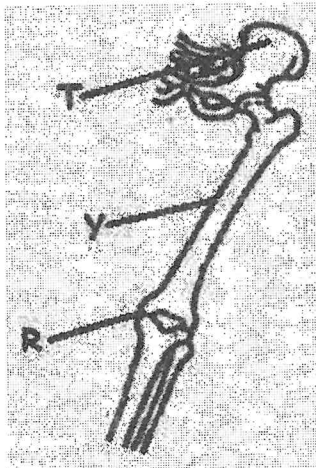
b) What happens to each of the following when we breathe out?

(i) Rib Cage _____

(ii) Diaphragm _____

c) Identify **one** habit that can destroy human lungs

48. The diagram shows bones found on the lower part of the human skeleton. Study and use it to answer questions that follow.



- a) Name the bones labelled T and Y.
(i) T _____ (ii) Y _____
- b) What type of joint is found at part R.

- c) Give **one** way that you can do to promote proper working of the muscular / skeletal system.

49a) What kind of injury is caused by each of the following?

- (i) Hot flat iron on the skin _____
- (ii) Steam on the skin _____
- b) What first aid is recommended for the above accidents?


- c) State **one** way of preventing the accidents above.

50a) Write T.T vaccine in full.

- b) State **two** groups of people who should receive the T.T vaccine.
(i) _____
(ii) _____

- c) How is the T.T vaccine important to the above groups of people?
-

51. The diagram shows a method of making magnets.



- a) Which method of magnetization is shown in the diagram?
-
- b) Name the pole marked B.
-
- c) What do we call the region around a magnet where magnetism is felt?
-
- d) Identify one way a magnet can be demagnetized.
-

52a) Which component of blood helps in;

(i) transporting digested food. _____

(ii) transporting oxygen _____

b) To which system of the body does blood belong?

c) Why is it important to screen any blood to be used for transfusion?

53a) Give one example of the following:

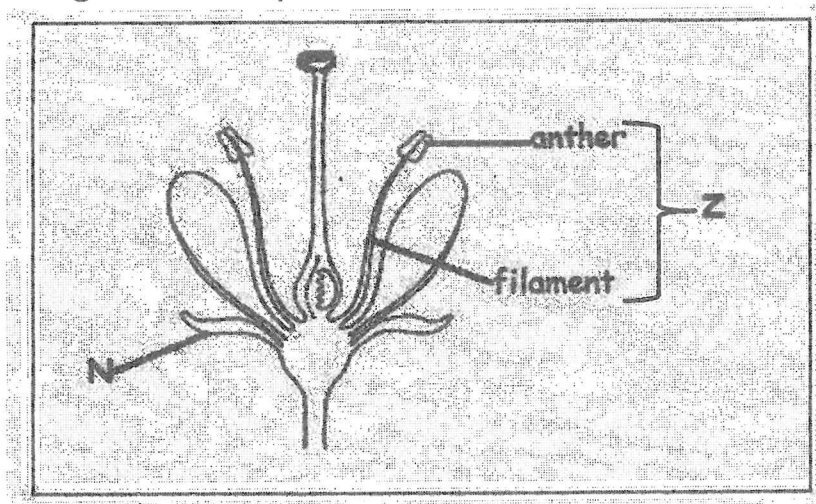
(i) Natural source of light _____

(ii) Artificial source of light _____

b) What is a shadow?

c) Give one use of shadows to people.

54. The diagram shows parts of a flower.



a) Name the part labelled N.

b) What happens to pollen grains when they are deposited on part D?

c) Name the part of the flower labelled Z.

d) How is a flower useful to a plant?

55a) Mention two man made changes of environmental degradation.

(i)

(ii)

b) State two effects of the changes mentioned above to the environment.

(i)

(ii)

THE END

SIR APOLLO KAGGWA SCHOOLS SINCE 1996
PLE PREP TEST III TERM 2 2022

PRIMARY SEVEN
ENGLISH

Time allowed: 2 hours 15 minutes

Index No.	EMIS NO.	Personal No.

Candidate's Name: _____

Candidate's Signature: _____

District Name: _____

School Name: _____

Read the following instructions carefully:

1. The paper has **two** sections: **A** and **B**
2. Section **A** Sub-Section I has 30 questions (30 marks) and Sub-Section II has 20 questions (20 marks)
3. Section **B** has 5 questions (50 marks)
4. Answer **ALL** questions. All answers to both Sections **A** and **B** must be written in the spaces provided.
5. All answers must be written using a blue or black ball point pen or ink. Diagrams should be drawn in pencil.
6. Unnecessary crossing of work may lead to loss of marks.
7. Any handwriting that cannot be easily read may lead to loss of marks.
8. Do **not** fill anything in the boxes indicated For Examiner's use only.

FOR EXAMINER'S USE ONLY

Qn. No	MARK	SIGN
1 – 16		
17 – 26		
27 – 35		
36 – 44		
45 – 50		
51 – 52		
53		
54		
55		
TOTAL		

Turn over

SECTION A

Questions 1 to 50 carry one mark each.

Sub Section I

For questions 1-5, fill in the blank space with the most suitable words to complete the sentence correctly

1. A carpenter uses sandpaper _____ smoothing wood.
2. My brother's school is not _____ from the main road.
3. The puppies are comfortably lying in their _____.
4. Had I gone to China, I would have learnt to speak _____.
5. Our neighbour _____ daughter was defiled reported the matter to the police.

For questions 6-15, use the words given in the brackets correctly

6. We heard the death _____ on Radio Waya FM. (announce)
7. You should call the painter to paint those _____ doors. (metal)
8. Unless she _____ school in time, she will miss the morning lesson. (reach)
9. This is the most _____ story book I have ever borrowed from the school library. (excite)
10. Naluggwa, the seamstress sells ladies' dresses _____. (cheap)
11. Had I got enough money, I _____ to the village for holidays. (go)
12. The _____ competitor in the one hundred metre race missed the trophy. (three)
13. The man who defiled the innocent girl was _____ for three years. (prison)
14. As soon as the passengers took their _____, they fastened the belts. (sit)
15. The timekeeper _____ the morning bell at 6:00 o'clock yesterday. (ring)

For questions 16-17, re-arrange the words in alphabetical order

16., spreading, spreads, spread, spreader

17. departure, departing, departs, depart

For questions 18-19, use each of the given word in a sentence, to show that you know the difference in their meaning.

18. write: _____

19. right: _____

For questions 20-22, rewrite the sentences, replacing the underlined words with their opposites

20. Teaching responsible children is quite difficult.

21. Of the triplets, Kato is the eldest.

22. Mummy bought a hen at ten thousand shillings.

For questions 23 -24, write the given words in full

23. DVD _____

24. they're _____

For questions 25-26, Rewrite the sentence and replace the underlined words with their plurals

25. People in Kapchorwa use a donkey for ploughing.

26. You should put my luggage in the boot.

In each of the questions 27 and 28, rewrite the sentence giving one word for the underlined group of words.

27. Candidates will have improved performance if they do an examination every week.

28. Their mother gave birth to three children at the same time.

For questions 29-30, re-arrange the given words to make meaningful sentences

29. from We make banana fibres balls.

30. table-mats interested Are in rectangular you?

Sub-Section II

Rewrite the following sentences, as instructed in the brackets

31. Brandon works hard at school. He wants to pass his exams with flying colours.

(Rewrite as one sentence using:in order to.....)

32. The police station is not far from the hospital gate.

(Rewrite using:near.....)

33. We completed our holiday work. We went to visit our friends after. (Join beginning: Having.....)

34. The bank manager didn't help me. The cashier didn't help me.

(Begin: Neither.....nor.....)

35. The waitress said, "I will serve all the guests myself." (Begin: The waitress said that)

36. They use wood-glue to fix pieces of wood. (Rewrite using: Wood glue is used.....)

37. We are eager to sit our PLE in November. (Rewrite using:looking forward to.....)

38. We bought some green vegetables for supper, didn't we?

(Rewrite ending:..... did we?)

39. People in Uganda speak English. (Begin: English)

40. Kaitesi is more interested in riding bicycles than in doing house chores. (Rewrite using:prefers.....)

41. Having written my letter, I enclosed it in an envelope. (Rewrite beginning: After.....)

42. A DVD player is an electronic device. A decoder is an electronic device. (Write as one sentence using:and so.....)

43. Whereas the chief-whip didn't come, the debate went on well. (Rewrite using:although.....)

44. She will buy postage stamps. She will buy envelopes either. (Rewrite as one sentence using:either.....or.....)

45. How important it is to reply to your friend's letters! (Begin: It is)

46. I can't remember the name of the boy. I gave my school bag to him. (Rewrite using:to whom.....)

47. A dictionary gives spellings of words. It also gives their meanings. (Rewrite as one sentence using:not only.....but also.....)

48. Abeja reached the examination room late but the invigilator didn't disqualify him.
(Rewrite beginning: Despite the fact.....)

49. As soon as the waitress took our order, she gave us soft drinks. (Rewrite beginning:
Hardly)

50. When will the Inspector of Schools visit our school?
(Rewrite beginning: On which.....?)

SECTION B

51. Read the passage below carefully, and in full sentences, answer the questions that follow.

In Butembo Sub-county, there are several activities done by people to earn a living. These are farming, business and craft making. The majority of the people are farmers. They grow crops and keep domestic animals.

However, there is one prominent man in Buyaga village who decided to use his skills to make life better for himself and his entire family. Mr. Magezi is indeed a skilled man! He makes crafts such as bags, mats, ropes and flower vases out of local materials. He makes mats out of palm leaves, ropes out of sisal and baskets out of palm-leaves or straws and flower vases out of plastics.

Most of the crafts that Magezi makes are made out of local natural materials that he gets freely from swamps and bushes. However, due to the increasing demand for his products, he sometimes buys artificial materials.

Safina, Magezi's wife also makes bags out of sisal and straws. They are beautifully designed in three sizes; small, medium and large ones. The prices of the products are determined by their sizes and materials from which they were made.

Magezi's eldest son Omayya, is a craftsman, too. After completing his secondary education, he joined Royal Technical Institute where he learnt how to make shoes and bags out of leather and hard clothes. He has a separate workshop where he uses special sewing

machines to make his products. His father helped him to connect electricity to his workshop. Indeed, the family business has expanded.

They have a large stall where they display their items for sale. There is a large sign-post which welcomes customers to the stall. Most of their customers are travellers who use Butembo Road. They are attracted by the beautiful designs of Magezi's products. The mats for instance, are designed with different colours. On good days, they get customers from foreign countries like America, Italy and China. These customers mainly come to Uganda as tourists.

On market days, there are several people using Butembo Road. On such days, they make more sales from the local buyers. Since most people in Butembo Sub-County are farmers, the majority of them buy ropes for tethering their animals. The rich people however buy flower vases, which they use to decorate their compounds.

In order to serve their customers better, they have also employed two salesmen to help them. The first salesman, Mr. Nyanzi works in the stall. He welcomes the customer with a smile and takes them around the stall, showing them different items from which they make their choices. He also offers discount to customers who buy more than one product. Such customers always come and buy other products. The second salesman, Madibo distributes the products to their customers in the neighbouring towns of Bulayo and Mpenja. This has helped the business to expand. Both salesmen ensure that they account for every amount of money they receive from the daily sales. This has helped the business to expand rapidly.

From the money they earn, Magezi is able to pay school fees for his two daughters, Nadia and Ariho. He also pays his two workers on a weekly basis. He has also been able to build a large commercial house in Bulowa Trading Centre. The local leaders of Buyaga village are very proud of Magezi for his contribution to the development of their village.

Questions

1. What is the passage about?

2. What activities do people of Butembo Sub-County do?

3. Name any two products Magezi makes out of palm leaves?

4. What does Safina make out of sisal and straws?

5. Who makes leather bags and shoes according to the writer?

6. What determines the prices of products in Mr. Magezi's stall?

7. What is the purpose of having the signpost near the stall?

8. Which customers are given discount?

9. How often does Mr. Magezi pay his workers?

10. Suggest another word or group of words which mean the same as the underlined word "rapidly"

52. The advertisement below appeared in The New Vision newspaper of 8th March 2022. Read it carefully, and in full sentences, answer the questions about it.

HELLO UGANDA, THIS IS MTN UGANDA!

Easter Offer for All of You

As we celebrate the resurrection of our Lord Jesus Christ,

MTN Uganda, the leading mobile telephone company has the following packages for you:

1. **MTN Voice Bundles**- enable you to call your friends and relatives from everywhere you go.

2. **MTN Internet**- enables you to surf all day and all night.

3. **Mkopa**- enables you to access solar panels at reduced prices and chase darkness out of your home

4. **MTN Me 2U**- enables you to surprise your friends by sending them airtime just from your phone.

5. **MTN Credit**- enables you to get airtime on credit and pay later.

6. **MTN Mobile Money**-enables you to access bank services just on your phone. You can pay for water and electricity bills, school fees or taxes.

MTN-Everywhere you go! MTN -Uganda's Better Connection.

By Kataike Sarah
Marketing Manager
3rd March, 2022

Questions

1. What name is given to the above information?

2. For whom is the information intended?

3. Who wrote the information?

4. How many packages are being advertised?

5. When was the information written?

6. Where can one find the above information?

7. Mention the package which enables one to borrow airtime.

8. Which package enables one to call friends and relatives all day?

9. Can one get airtime on credit on MTN?

10. How can the internet help a customer according to the information?

53. Pambaya Primary School in Mubende district held a Sports Day on 24th May, 2022 at the sports ground. Below is the programme that was drawn and pinned on the noticeboard by Mr. Bwambale Jackson, the Games and Sports master. Read it carefully, and in full sentences, answer the questions that follow.

Item	Time	Participants	Responsible Person
General Assembly	8:00 a.m.-8:30 a.m.	All Classes	Teacher-on-duty (Mrs. Loyce Mukisa)
Welcoming Chief-guest	8:30 a.m. 8:45 a.m.	Scouts	Head Teacher (Mr. Mondo Zimbe)
Football	9:00 a.m. 10:00 a.m.	P.6 vs P.7-(Boys)	Mr. Haning Mugabo (Referee)
Tug-of-war	10:00 a.m. 10:15 a.m.	P.5 Girls vs P.5 Boys	Ms. Namuli Resty Mr. Njuki Cosmas (Class Teachers)
Bottle-Filling	10:15a.m.- 10:45a.m.	P.1 and P.2	Mrs. Grace Kaggwa Ms. Nambi Agnes
Sack-race	11:00 a.m.- 11:30a.m.	P.4 vs P.3	Mr. Haning Mugabo Ms. Naiga Racheal
Volleyball	11:30 a.m.- 12:30p.m	Teachers vs Parents	Mr. Bukenya Cyrus
Award of Trophies	12:30-1:00 p.m.	All Classes	Mr. Lukanga Godfrey (DEO)

Questions

1. By whom was the above programme drawn?

2. Where can one find the above programme?

3. When was the sports day held?

4. Who welcomed the chief guest to the occasion?

5. Who officiated the football match between primary six and primary seven boys?

6. Which class participated in Tug-of war?

7. How long did bottle filling take?

8. At what time did the sack-race begin?

9. Write one sentence that shows that the parents attended the sports day.

10. Who presented trophies to the winners?

54. Oketcho Moses is a former pupil of Degeya Primary School. P.O Box 556, Mitanda, where he did his PLE in 2018 and passed with aggregate eleven. Unfortunately, Moses couldn't continue with his secondary education because he lacked money to pay his school fees. He went back to Bukato Village to stay with his parents.
Last week, he used his home address to apply for a job as a Salesman in Kitoro Supermarket. Read his letter carefully, and fill in the blank spaces with the most suitable words.

Bukato Village,
P.O Box 443,
Mparo.

29th May, 2022.

The Executive Manager,
Kitoro _____,
P.O Box 773,
Mparo.

Dear Sir,

Re: _____ FOR A JOB AS A SALESMAN

I am writing to humbly apply for a job as a salesman in your supermarket.

I am a Ugandan male aged seventeen years. I completed my primary education at _____ Primary School P.O Box 556, Mitanda. I did my PLE in 2018 and scored _____ eleven.

I failed to _____ with my secondary education because I _____ money to pay my school fees.

If given this job, I hope to save money to continue with my secondary education next year.

For more information about me, I _____ you to my former Head teacher, Mr. Magale David. You can _____ him on 0434 666 777.


I shall be very _____ if my application is accepted.

Yours faithfully,

OKETCHO MOSES

55. Pictures A-F tell a story. study them carefully. and write one sentence to describe what is happening in each of them. You can use the following words.

girl, mother, leaving, boda-boda, home, school, teacher, giving, approaching, welcoming, receiving, report card,



Picture A:

Picture B:

Picture C:

Picture D:

Picture E:

Picture F:

Questions

7. Where do you think is the girl going in Picture A?

8. Who do you think is giving a report card to the girl in Picture C?

9. In which class is the girl according to Picture B?

10. Why do you think the girl is excited in Picture D?

END